



HOLIDAY HOMEWORK

CLASS - III

SUMMER

D.A.V. PUBLIC SCHOOL, HCL, RUPNARAINPUR
SESSION: 2024 - 2025
HOLIDAY HOMEWORK

CLASS - III

ENGLISH

TASK FOR WEEK -1

1. PROJECT WORK

In an A-4 size Art Paper draw or paste your favourite pet and write a few sentences on how you will take care and enjoy your loving pet in this summer vacation.

2. What would you do if you see some of your class friends teasing animals while returning from school? (Do it in H.W. notebook)

TASK FOR WEEK -2

3. What are the good things you will keep in your mind while moving around the zoo? (Do it in H.W notebook)

TASK FOR WEEK -3

4. It is very important that we should be kind to all the birds and animals living in our neighbourhood .As a pet lover, express your views on how will you behave with them. (Do it in H.W notebook)

TASK FOR WEEK -4

5. Your best friend is going on a long summer holiday. He/ She has decided to leave his/her pet animal in your home. You friend has told you a few things about his/her pet. Keeping it in your mind, describe how you will take care of it. (Do it in H.W notebook)

HINDI

प्रथम-सप्ताह का कार्य

1. परियोजना कार्य (Project work)

संयुक्त व्यंजन वाले शब्दों पर आधारित चार्ट तैयार कीजिए।

(In A4 size paper)

द्वितीय-सप्ताह का कार्य

2. भारत देश के सभी राज्यों और राजधानियों के नाम लिखिए।

(In HW copy)

तृतीय-सप्ताह का कार्य

3. 'हाथी और चिड़िया' पाठ से हमें क्या शिक्षा मिलती है?

चतुर्थ सप्ताह का कार्य

4. नाम वाले और काम वाले 10-10 शब्द T-Chart में सजा कर लिखिए। (In HW copy)

BENGALI


১) প্রথমসপ্তাহ -

একটি 1/4 মাপের আর্টপেপারে বিড়ালের ছবি ঐঁকে বা ছবি চিটিয়ে, তার সম্বন্ধে ১০টি বাক্য লেখো।

২) দ্বিতীয়সপ্তাহ -

Home work খাতায়ফুল ঐঁকে স্বরবর্ণ গুলি ফুলের পাপড়িতে লেখো ও পেনসিল রং করো।

৩) তৃতীয়সপ্তাহ -



Home work খাতায় উপরের ছবিটি দেখে ৫ টি বাক্য লেখ।

৪) চতুর্থসপ্তাহ -

বোধপরীক্ষণ :

অনুচ্ছেদটি পড়ে প্রশ্নগুলির উত্তর খুঁজে লেখ:

টিভি দেখে পিন্টু চিৎকার করে উঠলো - "ভারত ও পাকিস্তানের খেলা শুরু হয়েছে!" পিন্টু মনে মনে চায় যে এই খেলায় ভারতই যেন জেতে। পিন্টুর বোন বুয়া গেছে মামার বাড়ি বেড়াতে। মাও সাথে গেছেন। তাই পিন্টু তার বাবার সাথে বসে টিভিতে খেলা দেখছে।

ক) কার সঙ্গে কার খেলা হচ্ছিল?

খ) বুয়ার দাদার নাম কি?

গ) পিন্টুর মা কোথায় গেছেন?

ঘ) পিন্টু মনে মনে কি চায়?

ঙ) পিন্টু কার সাথে বসে খেলা দেখছিল?

MATHEMATICS

FIRST WEEK

1. Write the Greatest and the Smallest 4 digit number using the digits in the given boxes:

Digit	Greatest Number	Smallest Number
8,0,3,9		
1,7,4,3		
3,4,0,1		

2. Find the sum of the largest 4-digit number, smallest 4-digit number, and greatest 3-digit number.

3. Find the sum of the place value of thousands and tens place digit in the numeral 9542.

SECOND WEEK

4. Find the sum of 31 ones+10 tens+7 hundreds.

5. Arrange in ascending order:

a) 6834, 8621, 9517, 1567, 1695.

b) 120 ones, 650, 39 tens, 7 hundreds, 72 tens.

6. Choose the correct options.

i) Which of these numbers have more tens?

a) 879 b) 798 c) 993 d) 907

ii) The _____ 3- digit number is a predecessor of the smallest 4-digit number.

- a) smallest b) largest c) same d) none of these
- iii) The difference between the place value of 9 and 2 in the numeral 9542 is
 a) 9988 b) 8998 c) 8899 d) 9889
- iv) $99 + \underline{\quad} = 11$ tens
 a) 9 b) 10 c) 11 d) 20
- v) If you add 168 to me, I will become 300. Who am I?
 a) 132 b) 122 c) 468 d) 123

THIRD WEEK

7. Fill in the blanks:

- a) 1000 ones = _____ thousand
 b) 10 thousand = _____ hundred
 c) 1 thousand = _____ tens
 d) 10 tens = _____ ones

8. Find the difference between the greatest number and the smallest number among: 3290, 6889, 8756, and 6389.

9. The following newspapers are circulated in a city.

Name of the Newspaper	Number of Copies
Amar Ujala	7189
Dainik Jagaran	4906
The Hindu	1560
The Hindustan Times	3450
Times of India	5562

- a) Arrange the numbers in Descending Order.
 b) What is the place, place value and face value of 5 in the newspaper copies of 'The Hindu'?
 c) Which newspaper sells maximum copies in the city?
 d) What is the total number of newspapers circulated in the city?
 e) Is reading a newspaper a good habit or just a waste of time? Justify your answer.

FOURTH WEEK

10. A number has 3 in hundreds place, 5 in one's place, 2 in tens place and 7 in thousands place. Frame the number. If the digit of tens and thousand place are interchanged find the new number.

11. What must be added to 8163 to get largest 4-digit number?

12. PROJECT WORK

Make an Abacus using beads and toothpicks, of any 4 digit number.

SCIENCE



















Task for week 1:

1. Draw a plant and decorate it with the help of wool, thread, sequins, beads or pulses. Also label the parts of the plant. Do it in your science practical copy.

Task for week 2:

1. Identify which of the following senses are functional in the given activities. First one is done for you.

(You can draw the following or get a print out and paste in your science practical notebook.)

Task for week 3:

1. Make a model of tongue using clay and show the taste zones.

Task for week 4:

1. Raju always studies in dim light. Is it a good habit? Which sense organ may get affected in this case?
2. "Eyes, ears, nose, skin and tongue are some special body parts ". Mention five ways to take care of these organs.
3. "We should take a bath daily to clean our skin". Is this true? If true then answer why?

SOCIAL SCIENCE

1ST WEEK:

1. Prepare one family album in your scrapbook.
2. Read the following passage carefully and give the answers of the following questions in your homework copy.

Dr. A.P.J. Abdul Kalam, the 11th President of India was born on 15th October 1931 in a small village in Rameshwaram in Tamilnadu. His father was a poor boat man with seven children. As a school student, Dr. Kalam sold newspapers to continue his education. He became a great scientist and won many awards like Padma Bhushan, Padma Vibhushan, Bharat Ratna and many others. He was elected to the highest post i.e. the President of India.

Q.a) Dr. A.P.J. Abdul Kalam was the eleventh President of India. Name the 1ST and the present President of India.

Q.b) Name the state where he was born.

Q.c) What occupation did he choose to continue his education in his school days?

Q.d) Name two women scientist of India.

2ND WEEK:

3. Make one diet chart for yourself on A/4 size paper.
4. Gather sample of 5 crops grown in India on a political map of India. Mark the places where they are found, colour the states with different colours.

3RD WEEK:

5. Make two Thanks Giving Cards for uncle and aunty of your school who everyday help you very much in your school hours.
6. Your friend Basav has come to your house to attend your uncle's marriage ceremony. While taking dinner together, you have noticed that Basav has taken too much food in his dinner plate what he is not able to eat. In this situation what advice you will give to your friend Basav? Write in your Homework copy.

4TH WEEK:

7. On the political map of India mark a state with cold climate and mountains. Discuss with your family about Mountain region and prepare a list of things you need to carry with you if you visit there. Paste pictures also on A/4 size sheet.

VALUE EDUCATION

TASK OF WEEK -1

- 1) In the story "Meesha and Bruno", Bruno left the home thinking that no one loves him anymore. Was he right in doing so? Why he took such decision?

TASK OF WEEK -2

- 2)" There is very little difference between right and wrong". Sometimes we do things thinking that it is right but later it comes out to be wrong. Write one such thing that you had done thinking it as right but actually it was wrong. What was the consequence of it?


TASK OF WEEK-3

- 3) Make this tree by using cardboard and paper and in place of the given values write down the values that you have learnt after reading "Meesha and Bruno", "Right and Wrong" and "Late Lateef Pihu".



TASK OF WEEK -4

- 4) Values are important for all of us. They help us to do the right things. What values do you learn from the pictures given below? Draw or paste each picture in your copy and write the value attached to it.



GENERAL KNOWLEDGE

1. Paste the pictures of the national all things (animal, bird, fruit, flower, emblem, river, tree) in your c.w. copy.
2. Complete the Unit: Environment Around Us unit in your G.K.Book.

ICT

1st week

1. Paste the pictures of the all computers parts (monitor, keyboard, mouse, cpu and desktop) in your c.w. copy.

2nd week

2. Write the full form CPU, VDU, in your c.w. copy.

3rd week

3. Name some machines that you use on an everyday basis. Write in classwork copy.
4. What is something present in your house which looks like a computer monitor? Write in classwork copy.